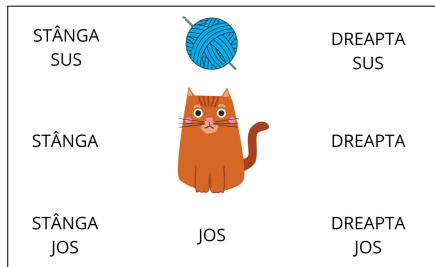


Ghemul pisicii - cum se numește poziția lui?


Name: _____

1.



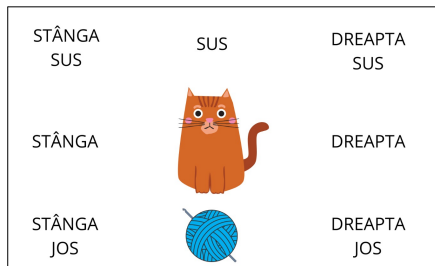
- A STÂNGA
 B STÂNGA SUS
 C SUS
 D DREAPTA JOS

5.



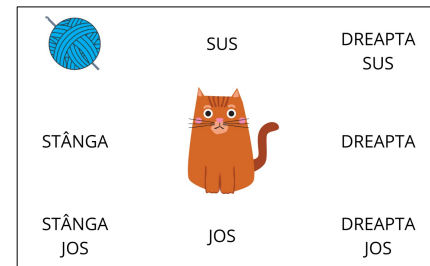
- A STÂNGA SUS
 B DREAPTA JOS
 C DREAPTA SUS
 D STÂNGA JOS

2.



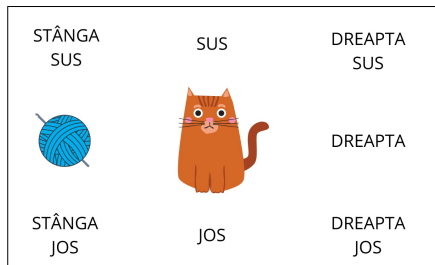
- A SUS
 B JOS
 C DREAPTA JOS
 D DREAPTA SUS

6.



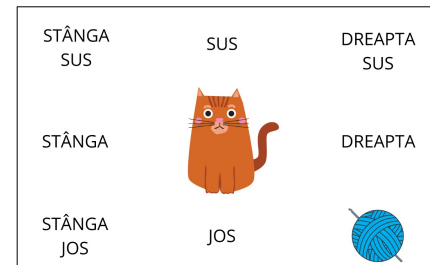
- A SUS
 B STÂNGA
 C STÂNGA SUS
 D STÂNGA JOS

3.



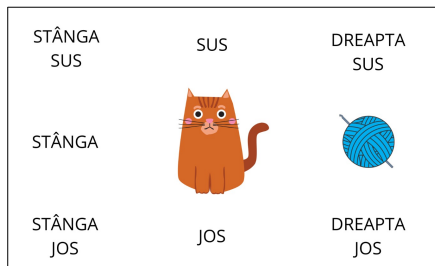
- A STÂNGA
 B DREAPTA
 C STÂNGA JOS
 D JOS

7.



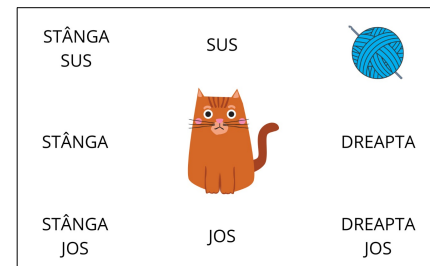
- A DREAPTA JOS
 B DREAPTA SUS
 C STÂNGA SUS
 D DREAPTA

4.



- A DREAPTA
 B DREAPTA SUS
 C SUS
 D STÂNGA SUS

8.



- A DREAPTA
 B SUS
 C DREAPTA SUS
 D STÂNGA