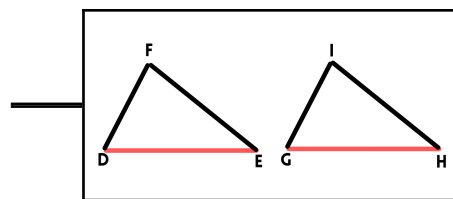
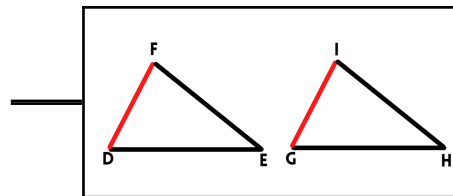


Draw a line to connect each pair of boxes

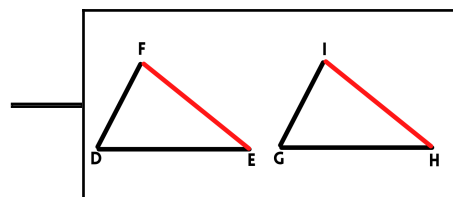
$$[FE] \equiv [IH]$$



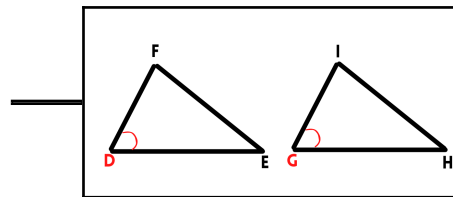
$$[DE] \equiv [GF]$$



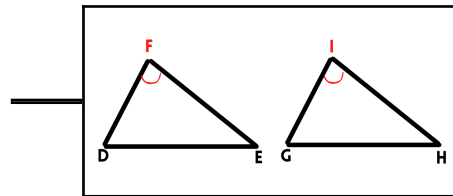
$$\angle D \equiv \angle G$$



$$[DF] \equiv [GI]$$



$$\angle E \equiv \angle H$$



$$\angle F \equiv \angle I$$

