

Află înțreitul obiectelor de mai jos

Name: _____

1.




A 18 B 9 C 24

2.



A 21 B 15 C 9

3.



A 9 B 12 C 18

4.



A 15 B 9 C 24

5.




A 18 B 9 C 6

6.



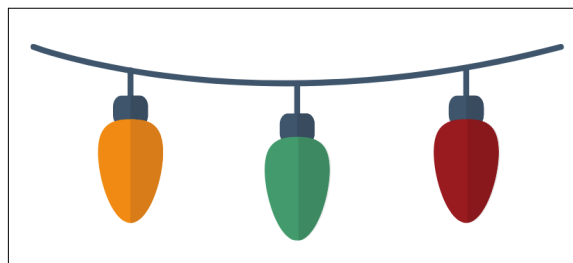
A 6 B 3 C 21

7.



A 24 B 12 C 15

8.



A 9 B 6 C 12