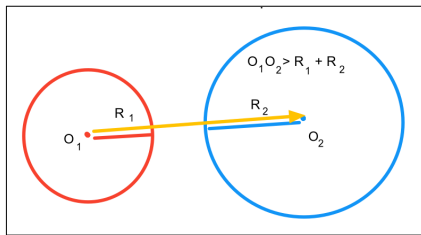


Poziția cercurilor

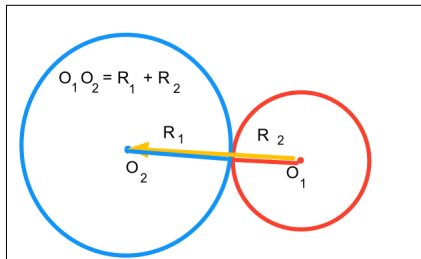
Name: _____

1.



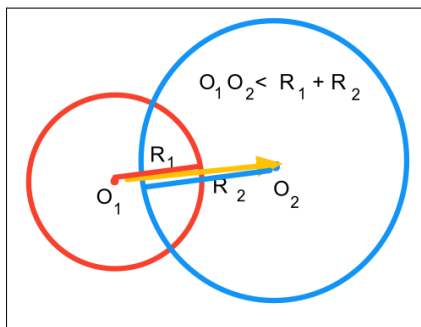
- A exterioare
- B concentrice
- C interioare
- D tangente exterior

2.



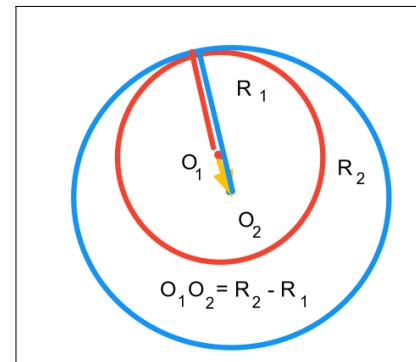
- A tangente exterior
- B secante
- C concentrice
- D tangente interior

3.



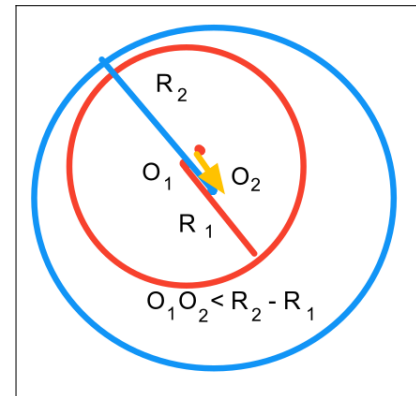
- A tangente interior
- B interioare
- C secante
- D exterioare

4.



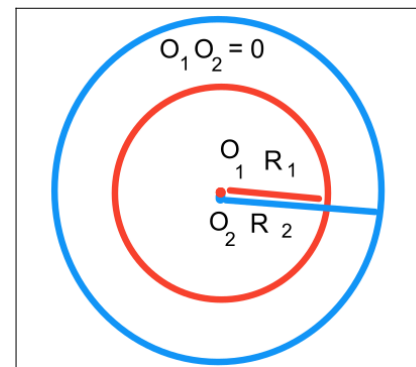
- A concentrice
- B tangente exterior
- C tangente interior
- D interioare

5.



- A secante
- B tangente exterior
- C exterioare
- D interioare

6.



- A secante
- B tangente exterior
- C exterioare
- D concentrice