

# Tipuri de triunghiuri

Scrie sub fiecare triunghi tipul lui știind ca:

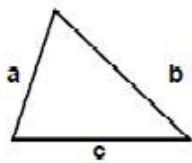
-triunghiul **oarecare** are laturile de lungimi diferite

-triunghiul **isoscel** are doua laturi de lungimi egale

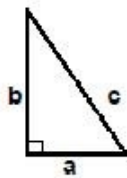
-triunghiul **echilateral** are toate laturile de lungimi egale

-triunghiul **dreptunghic** are un unghi drept

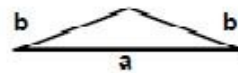
1)



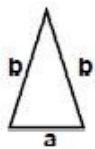
2)



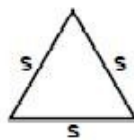
3)



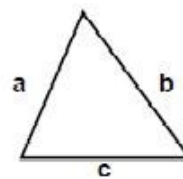
4)



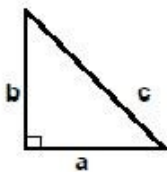
5)



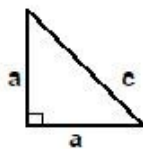
6)



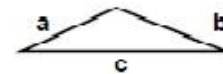
7)



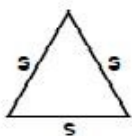
8)



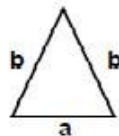
9)



10)



11)



12)

